

Thakur Educational Trust's (Regd.)
THAKUR VIDYA MANDIR HIGH SCHOOL & JUNIOR COLLEGE
I Terminal Examination 2016-17
Subject : English

Std: III
DATE - 26/09/2016

MARKS: 80
Time : 2.45 hrs

Q I A) Fill in the blanks :

(5)

1. The 1952 Olympics were held in _____.
2. Sindbad set sail with a company of _____.
3. The _____ is the weapon of the bee.
4. Polynesia was talking to _____.
5. The _____ bees take the nectar and pollen from the flowers.

B) Match the column :

(5)

A

B

- | | |
|---------------|---------------------------|
| 1. overjoyed | a) grannies |
| 2. honey comb | b) sweet juice in flowers |
| 3. granny | c) very costly |
| 4. nectar | d) very happy |
| 5. valuable | e) house of honey bees |

C) Write whether the following statements are True or False :

(5)

1. Miss Nina did not tell them a story that day.
2. Sindbad was very tired and hungry.
3. The little boy was naughty.
4. The girl thought, she would become a hermit.
5. The bee uses its weapon if anyone tries to disturb the comb.

D) Answer the following questions in one word.

(5)

1. Who had come to stay with the little boy and his family?
2. The island was not a 'real' island. Then what was it?
3. Where does the Sugar-Plum Tree bloom?
4. What is the activity that involves repeating the same thing several times known as?
5. Who was Polynesia?

Q II A) Circle the odd man out : (4)

1. boy, mother, uncle, aunt, house
2. that, chat, what
3. some, come, home
4. chin, throat, eyes, uncle, nose

B) Write your own sentences using the following phrases : (4)

1. on the island
2. spick and span
3. long long ago
4. all day long

C) Write the opposites : (6)

1. pretty
2. strong
3. new
4. First
5. costly
6. best

D) Write a rhyming word for the given words : (6)

1. rain
2. way
3. worry
4. renown
5. white
6. keep

Q III A) Rewrite the following words adding 'est' : (5)

1. poor
2. hot
3. happy
4. young
5. short

B) Answer the following questions in one sentence : (9)

1. What order did the captain give his men?
2. Where was Khashaba Jadhav born?
3. Why is the bee called a busy bee?
4. What does the lighthouse look like?
5. What were the sun and the rain doing?
6. Why is the girl sad?
7. Which are the seasons mentioned in the poem 'Curiosity'?
8. What work do the young bees do?
9. How many languages can parrots talk?

C) Answer in brief : (6)

1. What did Polynesia tell the doctor about animals talking without making a noise?
2. Where does the girl plan to go?
3. What was the well like? Describe it in two or three lines.

Grammar

Q IV A) Do as directed : (10)

1. The Ganga is a river.

(Underline the common noun and circle the proper noun)

2. A _____ of wolves attacked the travellers.

(Fill in the blank with suitable collective noun)

3. Ram _____ (write) a letter to his mother.

(Fill in the blank with simple present tense of the verb given in the bracket)

4. Veena _____ a new bag.

(Fill in the blank with 'has' or 'have')

5. He is _____ honest man.

(Fill in the blank with 'a' or 'an')

6. bench

(Write the plural form of the given noun)

7. The father loved the eldest son very much.

(Rewrite the sentence changing the gender of the underlined words)

8. _____ is your name?

(Fill in the blank with correct question word)

9. liked book the anju

(Rearrange the words and rewrite the sentence correctly using proper punctuation)

10. His book _____ kept on the table.

(Fill in the blank with 'was' or 'were')

B) Read the following passage and answer the questions : (3)

Pandit Jawaharlal Nehru was the first Prime Minister of independent India. He was born on 14th November 1889 at Allahabad. His father's name was Motilal Nehru. He went to England for higher studies. Pandit Nehru loved children and they call him affectionately as Chacha Nehru. So, his birthday is celebrated as Children's Day.

1. Who was Pandit Jawaharlal Nehru?
2. When and where was he born?
3. What was his father's name?

C) Write a letter to your grandparents asking about their health and well being. (3)

D) Write an essay on any one of the following topics : (4)

1. Rainy Season
2. Independence Day

All the best

Q I A) Fill in the blanks :

(5)

1. Polynesia was _____ that she could talk in two languages.
2. The weapon of the bee is its _____.
3. The little boy lived in a pretty little _____.
4. The _____ was overjoyed to see Sindbad alive.
5. Khashaba Jadhav was born in a village called _____ in Satara district.

B) Match the column :

(5)

A

B

- | | |
|--------------|------------------------------------|
| 1. pollen | a) house of bees |
| 2. generous | b) rainbow |
| 3. overjoyed | c) yellow powdery stuff in flowers |
| 4. honeycomb | d) very kind |
| 5. sky | e) very happy |

C) Write whether the following statements are True or False :

(5)

1. The girl thought, she would become a hermit.
2. The frogs hated the rainy seasons.
3. The class was happy in the end.
4. Olympic games are held every 6 years.
5. The King put Sindbad in prison.

D) Answer the following questions in one word.

(5)

1. Who set sail with a company of merchants?
2. How many bouts did Khashaba Jadhav win at Helsinki?
3. Who was Polynesia?
4. Which day of the week was the story telling period?
5. Which tree blooms on the shore of the Lollipop sea?

Q II A) Circle the odd man out : (4)

1. catch, match, watch, batch
2. chin, throat, eyes, uncle, nose
3. rose, lily, sunflower, apple, lotus
4. boy, mother, uncle, aunt, house

B) Write your own sentences using the following phrases : (4)

1. as pretty as a picture
2. spick and span
3. all day long
4. on the island

C) Write the opposites : (6)

1. quickly
2. strong
3. pretty
4. youngest
5. crooked
6. loved

D) Write a rhyming word for the given words : (6)

1. sick
2. worry
3. way
4. rain
5. white
6. tree

Q III A) Rewrite the following words adding 'est' : (5)

1. deep
2. happy
3. pretty
4. young
5. short

B) Answer the following questions in one sentence : (9)

1. Why did the frogs begin to jump for joy?
2. Which are the seasons mentioned in the poem 'Curiosity'?
3. What does the lighthouse look like?
4. Why is the girl sad?
5. What did the uncle believe in ?
6. What order did the Captain give his men?
7. Who takes part in Olympic games?
8. What work do the young bees do?
9. What were the sun and the rain doing?

C) Answer in brief : (6)

1. Why were the frogs worried?
2. What does a lighthouse do?
3. Why was the Doctor excited?

Grammar

Q IV A) Do as directed : (10)

1. The _____ of people had gathered outside Plaza theatre .

(Fill in the blank with suitable collective noun)

2. Rohan _____ (play) the guitar very well.

(Fill in the blank with simple present tense of the verb given in the bracket)

3. The waitress took the order from my mother.

(Rewrite the sentence changing the gender of the underlined words)

4. A cat met ____ owl one day. The cat smiled at ____ owl.

(Fill in the blank with 'a' , 'an' or 'the')

5. i) mouse ii) deer

(Write the plural form of the given noun)

6. _____ can you meet me?

(Fill in the blank with correct question word)

7. Ram is a hard working boy.

(Underline the proper noun and circle the common noun)

8. loudly the baby crying was

(Rearrange the words and rewrite the sentence correctly using proper punctuation)

9. Mumbai _____ many tourist spots.

(Fill in the blank with 'has' or 'have')

10. orange, mango, apple, banana, grapes

(Arrange the words in alphabetical order)

B) Read the following passage and answer the questions :

(3)

Mrs. Indira Gandhi was the first lady Prime Minister of India. She was the daughter of Pandit Jawaharlal Nehru and the granddaughter of Motilal Nehru. She had strength, courage and determination, just like her father. She had two sons, Rajiv Gandhi and Sanjay Gandhi. The leaders of all the nations respected and admired Indira Gandhi.

1. Name the first lady Prime Minister of India?
2. Who were her father and grandfather?
3. Who admired Mrs. Gandhi?

C) Write a letter to your grandparents asking about their health and well being.

(3)

D) Write an essay on any one of the following topics :

(4)

1. Rainy Season
2. Independence Day

All the best

Std: III

Sub. : Mathematics

Marks : 90

Date : 06/10/2016

Duration : 2 hrs. 45 min.

Q. I.A] Fill in the blanks :

(6)

- 1) A square has _____ corners.
- 2) 3 notes of 20 rupees each make _____ rupees.
- 3) $2U + 3U + 2U =$ _____ U .
- 4) The difference between 500 and 300 is _____.
- 5) Seven fives are _____.
- 6) The _____ is the standard unit for measuring liquids.

B] Match the columns :

(5)

- | 'A' | 'B' |
|--------------|-----------------------------|
| 1) Rectangle | a) $10 + 10 + 10 + 10 + 10$ |
| 2) Ten tens | b) symbol for rupees |
| 3) 50 | c) opposite sides |
| 4) ₹ | d) 10 mm |
| 5) 10 cm | e) 100 |

C] Arrange vertically and add :

(12)

- | | |
|----------------|----------------|
| a) $642 + 135$ | b) $191 + 201$ |
| c) $222 + 146$ | d) $900 + 54$ |
| e) $121 + 325$ | f) $300 + 200$ |

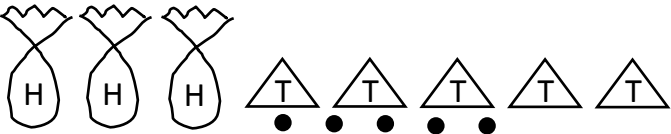
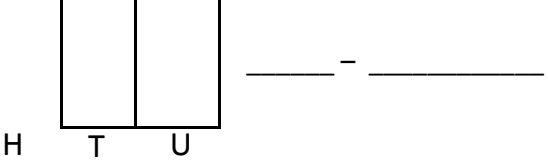
D] Write the total value :

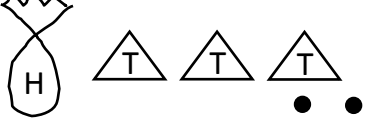
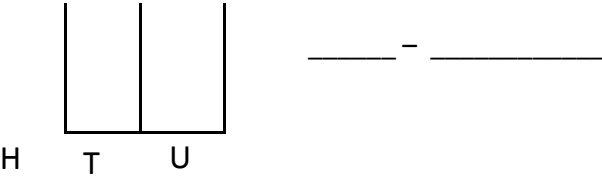
(4)

- 1) ₹ 50 + ₹ 20 + ₹ 10 = ₹ _____
- 2) ₹ 100 + ₹ 100 + ₹ 100 = ₹ _____
- 3) ₹ 50 + ₹ 10 + ₹ 5 = ₹ _____
- 4) ₹ 10 + ₹ 5 + ₹ 2 + ₹ 1 = ₹ _____

: 2 :

Q.II.A] Place the right number of beads on the wire of the abacus and then write the number in figures and in words. (4)

1)  



2)  

B] Arrange vertically and subtract. (12)

- a) $495 - 241$ b) $550 - 250$
- c) $888 - 723$ d) $742 - 240$
- e) $978 - 568$ f) $848 - 800$

Q.II.C] Do as directed.

1) Name the given following figures : (2)

a)  - _____ b)  - _____

2) Write the place value of the underlined digits : (2)

- a) 709 b) 739

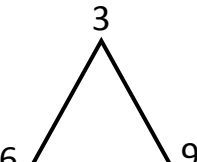
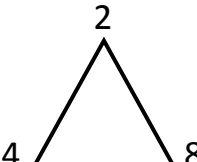
3) Write the expanded form of the given numbers : (2)

- a) 900 b) 924

4) Write the smallest and biggest number : (2)

Digits	Smallest number	Biggest number
a) 6, 2, 5		
b) 9, 1, 0		

5) Make three-digit numbers using each of the given digits only once. (4)

a)  b) 

Contd....3/-

: 3 :

Q.II.C

6) a) _____, 512 (Write the number that comes before) (1)

b) 338, _____ (Write the next number) (1)

c) 799, _____, _____ (Write any 2 numbers that come after the given numbers) (2)

7) Arrange the following numbers in ascending and descending order. (4)

a) 450, 350, 550, 250

b) 715, 620, 825, 510

8) $312 + 514$ (Add horizontally) (2)

9) Using the first fact, find the next product. (2)

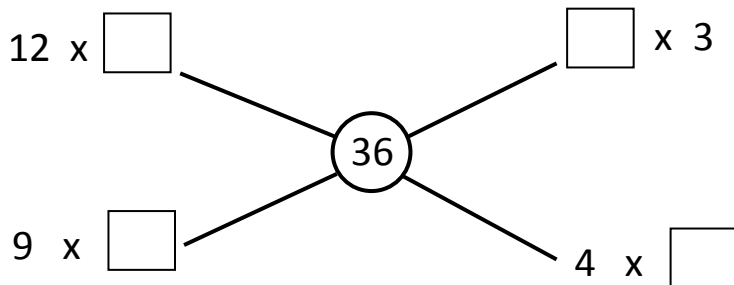
$$8 \times 4 = 32$$

$$8 \times 5 = ?$$

--	--	--

10) $899 - 544$ (Subtract horizontally) (2)

11) Fill in the boxes : (2)



12) Name three kinds of balances used to measure weight. (3)

Q.III.A] Multiply (4)

$$\begin{array}{r} a) \quad 3 \\ \times 8 \\ \hline \end{array}$$

$$\begin{array}{r} b) \quad 7 \\ \times 4 \\ \hline \end{array}$$

$$\begin{array}{r} c) \quad 6 \\ \times 8 \\ \hline \end{array}$$

$$\begin{array}{r} d) \quad 9 \\ \times 3 \\ \hline \end{array}$$

B) Prepare an addition table to make the 4 times table. (6)

C) Solve the following word problems. (6)

1) There are 5 apples in a basket. How many apples are there in 3 such baskets ?

2) There are 7 days in a week. How days in 6 such weeks ?

*** All the Best ***

QI A] Fill in the blanks:

12

1. _____ water has no colour, smell or taste.
2. In the presence of _____ plants make their food.
3. The shelter built for _____ is called chicken coop.
4. We weave _____ from cotton, wool and silk.
5. The continuous breathing is called _____.
6. People in villages are dependent on the _____ market for their daily needs..
7. Many rivulets join together to form a _____.
8. There is _____ spread all around us.
9. _____ is the rule of nature.
10. There are _____ main directions.
11. The _____ is split into three parts for convenience.
12. Now a days _____ are commonly used for transport.

B] Match the pairs :

6

- | A | B |
|----------------------------|----------------|
| 1. Horse | a) state |
| 2. Maharashtra | b) leaves |
| 3. the time of ten years | c) Bengal gram |
| 4. house lizard and snakes | d) farming |
| 5. caterpillars | e) reptiles |
| 6. tractor | f) decade |

C] State true or false :

6

1. Sugar does not dissolve in water.
2. Due to illness we become unhealthy.
3. Each country is made up of several states.
4. Non living things need to do breathing.
5. The world 'Today' indicates the present.
6. Man lived a nomadic life before he began farming.

Q II A] Find the odd man out : -

6

1. ice, steam, water, oil.
2. fox, tiger, cow, lion.
3. cold, sun, rains, food.
4. March, April, Monday, June.
5. bed bugs, gnats, ants, octopus.
6. glass, water, card board, gelatin paper.

B] Name the following : **10**

1. Any two animals which have stripes on their body.
2. Any two uses of water.
3. Any two things used by birds to build a nest.
4. Any two land forms.
5. Any two languages known by Rajguru.

C] Distinguish between the following : **8**

1. Living things and Non living things (any two Points)
2. Plants and animals (any two Points)

QIII A] Answer the following in one sentence each : **10**

1. Where do we find fish?
2. When does water start boiling?
3. From what do rivers, wells, springs and lakes get water ?
4. What do you fill into a balloon, when you blow in it ?
5. What is the use of an index ?
6. What was Sant Gadge Maharaj's appeal to the people ?
7. Where is ice made on a large scale ?
8. Which direction does the magnetic needle show ?
9. What is made from clay, stone and wood by man ?
10. Which day is celebrated as 'World Heritage Day'?

B] Give reasons: **8**

1. We need air.
2. Bat is not a bird.
3. We do not want mice in our house.
4. During the rainy season, crisp biscuits become soft.

C] Answer in brief: **10**

1. What is a spring ?
2. What do the numbers in a calendar tell us ?
3. What do you mean by shelter ?
4. What is common between a fish and a chameleon ?
5. Write the benefits of transport services?

D] Draw and label diagram of a fish. **4**

All the best

ठाकुर विद्या मंदिर हायस्कूल एण्ड ज्युनियर कॉलेज
प्रथम सत्र परीक्षा – 2016-17

नाम _____ वर्ग _____ कर्मांक _____
विषय – हिन्दी अंक – 30
दिनांक : 30.09.2016 कक्षा – तीसरी समय : 1 घंटा 30 मिनट

प्र. 1.अ) रिक्त स्थानों में उचित स्वर लिखिए: (Fill in the blanks with the correct swar) 2

अ आ _____ ई उ _____ ऋ
ए _____ ओ औ _____ अः

ब) रिक्त स्थानों में उचित व्यंजन लिखिए: (Fill in the blanks with the correct vyanjan) 2

ट _____ ड ढ _____
य र _____ श


स) रिक्त स्थानों में उचित अक्षर लिखिए: (Fill in the blanks with the correct letter) 4

1) ल् + ई = _____ 2) _____ + औ = टौ
3) फ् + _____ = फु 4) म् + ए = _____


द) बारहखडी लिखिए: (Write Barahkhadi) 2

1) क _____


प्र. 2. जोड़ियों मिलाओ: (Match the column) 2




अ) शेर



ब) कबूतर



स) तितली



द) हिरन

प्र. 3. मात्राओं को जोड़कर शब्द बनाइए : (Join the matras & make a word)

4

1) म + ा + ल + ा = _____

2) प + र + ी = _____

3) र + ू + म + ा + ल = _____

4) ज + ल + े + ब + ी = _____

प्र.4. कोष्ठक में दिए गए शब्दों में से उचित शब्द चुनकर रिक्त स्थानों की पूर्ति कीजिए:
(Fill in the blanks from the words given in the bracket)

4

(गुलाबजामुन, झूला, किताब, चाची)

1. अनिल _____ ला।

2. नीरज, _____ की घडी ला।

3. मधु _____ लाई।

4. नीनू _____ झूल रही थी।

प्र. 5. शरीर के विभिन्न अंगों के नाम हिन्दी में लिखिए ।

4

(Write the name of parts of body in Hindi)

1. _____

2. _____

3. _____

4. _____

प्र. 6. नीचे दिए गए अंग्रेजी अंकों को हिन्दी अंकों और शब्दों में लिखिए ।

6

(Write following English numbers in Hindi numbers & words)

English numbers

Hindi numbers

Hindi words

3

6

9

शुभकामनाएँ

QI A] Fill in the blanks:

12

1. All _____ need food.
2. Bubbles rise up in the water when we _____ into the water.
3. _____ water has no colour.
4. Many rivulets join together to form a _____.
5. Water keeps the blood _____.
6. _____ is the new means of transport.
7. _____ district is known for fort Raigad.
8. The numbers in a _____ tell us date, week, month and year.
9. There are _____ main directions.
10. Pigeons find shelter in the _____ of the walls.
11. There is _____ spread all around us.
12. People from _____ wash their clothes near rivers.

B] Match the pairs :

6

- | A | B |
|--------------|---------------------------|
| 1. mountain | a) means of communication |
| 2. sheep | b) making jewellery |
| 3. letter | c) spreads Malaria |
| 4. goldsmith | d) what is yet to come |
| 5. future | e) shrubs |
| 6. mosquito | f) land form |

C] State true or false :

6

1. We can see air all around us.
2. Dams are formed naturally .
3. Boats and ships are the means of air transport .
4. Man lived a nomadic life before he began farming .
5. It is important to understand ' time ' for studying history .
6. Tractor is used for farming .

Q II A] Find the odd man out : -

6

1. glass, water, cardboard, gelatin paper.
2. thermometer, clock, hourglass, water clock.
3. fox, tiger, cow, lion.
4. needles, grass, sticks, cotton.
5. tiger, leopard, hyena, rabbit.
6. octopus, butterfly, whale, fish.

B] Name the following : **10**

1. Place where ice is made on a large scale.
2. Name of your nation.
3. Two Languages known by Rajguru.
4. Two water bodies.
5. Two instruments for measuring time.
6. Two means of airways.

C] Distinguish between the following : **8**

1. Plants and animals (2 Points)
2. Living things and Non living things (2 Points)

QIII A] Answer the following in one sentence each : **10**

1. What will happen if we do not collect rain water?
2. How do fishes breathe?
3. Why do cows, buffaloes and goats come to the source of water?
4. What was Sant Gadge Maharaj's appeal to the people?
5. What is communication?
6. In how many parts is the time split for convenience?
7. What do we make use of to determine the east?
8. What does tailor bird use to stitch its nest?
9. During the rainy season, why do crisp biscuits become soft?
10. What is the use of an index?

B] Give reasons: **8**

1. We can see a nail that has sunk to the bottom of the water.
2. Farming is not possible without enough water.
3. Plants are living things.
4. Snakes and chameleons crawl.

C] Answer in brief: **10**

1. What is a spring?
2. How is ice candy or ice fruit made?
3. Why we drink water?
4. How do plants make their own food?
5. Write the benefits of transport services?

D] Draw and label the diagram of a fish. **4**

All the best

विषय – मराठी

दिनांक : 28.09.2016

नाव :

इयत्ता – तिसरी

तुकडी –

गुण – 30

वेळ – 1 तास 30 मि.

पट क :

प्र. 1ला. रिकाम्या जागी योग्य स्वर लिहा. (Fill in the blanks with correct swar)

2

अ आ — ई उ — ऋ — ऐ — औ अं अः

प्र. 2रा. रिकाम्या जागी योग्य व्यंजन लिहा. (Fill in the blanks with the correct vyanjan)

2

क — — — —

त — — — —

प्र. 3रा. रिकाम्या जागी योग्य अक्षर लिहा. (Fill in the blanks with the correct letter)

3

1) म् + ऐ = —

2) — + ऊ = सू

3) ल् + — = लो

4) फ् + — = —

5) — + अं = बं


6) त् + अः = —

प्र. 4था. खालील चित्र व शब्दांच्या योग्य जोड्या जुळवा.

5

(Match the picture with their proper words)


1) फुलदाणी




2) ससा




3) कासव



4) गाय



5) मेंढी



प्र. 5वा.अ) खालील इंग्रजी शब्दांचे अर्थ मराठीत लिहा.

3

(Write the meanings of the following words in Marathi)

1) forest - —

2) soon - —

3) eyes - —

प्र.5वा. ब) खालील मराठी शब्दांचे अर्थ इंग्रजीत लिहा.

3

(Write the meanings of the following words in English)

1) आकाश - _____

2) थांबणे - _____

3) भाजी - _____

प्र. 6वा. खालील मराठी अंक मराठी शब्दात लिहा.
(Write numbers name in Marathi)

3

1) 2 _____

2) 8 _____

3) 6 _____

प्र. 7वा. खालील शब्द पूर्ण करा.
(Complete the words)

2

1) अंगा _____ र 2) क _____

प्र. 8वा. रिकाम्या जागा भरा. (Fill in the blanks)

2

(चांदोबा, ताई, झोका)

1) निळया आभाळी _____ जसा

2) बाळूला झोका देते _____

प्र. 9वा. खालील प्रश्नांची एका शब्दात उत्तरे लिहा.
5

(Answer in one word)

1) मुलांना दूध कोणी दिले ? _____

2) मुलीच्या हातात कोणते फळ आहे ? _____

3) गुरुवारी वर्गात मुले कशासाठी जमतात ? _____

4) मुलांनी पिलांसाठी काय आणले होते ? _____

5) गाईचे दूध कोणी काढले ? _____

हार्दिक शुभेच्छा